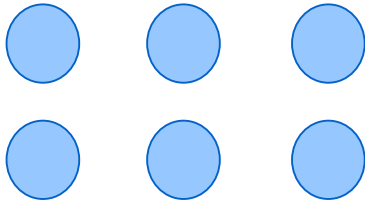


Rows, columns & arrays

Grade 2 Multiplication Worksheet

Fill in the blanks.



2 rows of **3**

$$2 \times 3 = 6$$




_____ rows of _____

$$\text{_____} \times \text{_____} = \text{_____}$$




_____ rows of _____

$$\text{_____} \times \text{_____} = \text{_____}$$



_____ rows of _____

$$\text{_____} \times \text{_____} = \text{_____}$$



_____ rows of _____

$$\text{_____} \times \text{_____} = \text{_____}$$



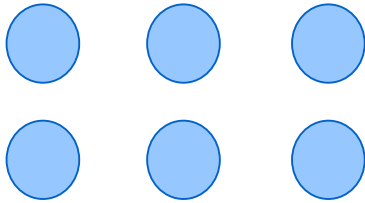
_____ rows of _____

$$\text{_____} \times \text{_____} = \text{_____}$$

Rows, columns & arrays

Grade 2 Multiplication Worksheet

Fill in the blanks.



2 rows of **3**

$$2 \times 3 = 6$$




2 rows of **1**

$$2 \times 1 = 2$$




3 rows of **2**

$$3 \times 2 = 6$$



4 rows of **5**

$$4 \times 5 = 20$$



3 rows of **3**

$$3 \times 3 = 9$$



5 rows of **2**

$$5 \times 2 = 10$$